

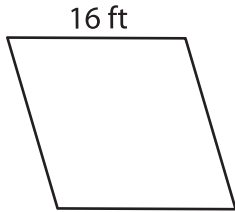
Name : \_\_\_\_\_

## Perimeter of a Rhombus

L2S1

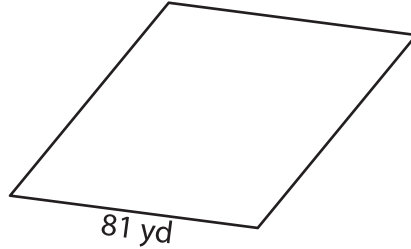
Find the perimeter of each rhombus.

1)



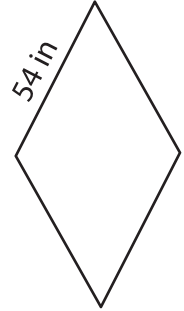
Perimeter = \_\_\_\_\_

2)

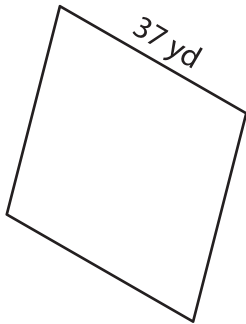


Perimeter = \_\_\_\_\_

3)



4)



Perimeter = \_\_\_\_\_

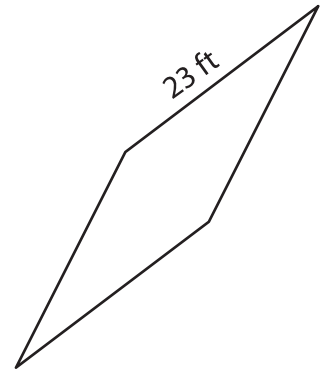
**PREVIEW**

Gain complete access to the largest collection of worksheets in all subjects!

Members, please log in to download this worksheet.

Not a member? Please sign up to gain complete access.

[www.mathworksheets4kids.com](http://www.mathworksheets4kids.com)



Perimeter = \_\_\_\_\_

7) What is the perimeter of

\_\_\_\_\_

8) Determine the perimeter of the rhombus, if its side length is 43 yards.

\_\_\_\_\_