


Name : _____

Perimeter of a Rhombus

Sheet 1

Find the side length each rhombus.

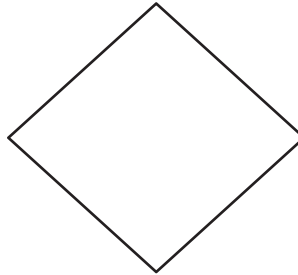
1)



Perimeter = 60 in

side length = _____

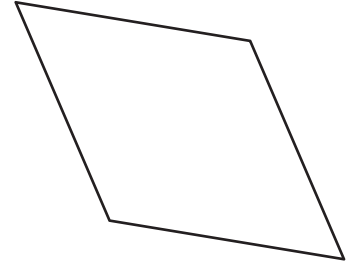
2)



Perimeter = 184 yd

side length = _____

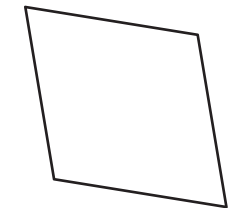
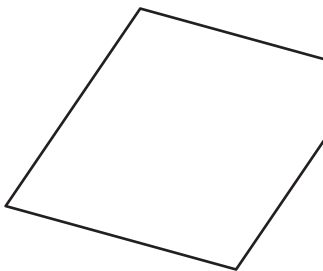
3)



Perimeter = 132 ft

side length = _____

4)



Perimeter = 32 in

side length = _____

7) The perimeter of a rhombus is 120 inches.

Find the side length of the rhombus.

8) If the perimeter of a rhombus is 120 inches, find the side length of the rhombus.

PREVIEW

Gain complete access to the largest collection of worksheets in all subjects!

Members, please log in to download this worksheet.

Not a member? Please sign up to gain complete access.

www.mathworksheets4kids.com