


Name : _____

Perimeter of a Rhombus

Sheet 5

Find the side length each rhombus.

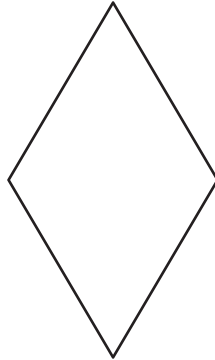
1)



Perimeter = 24 ft

side length = _____

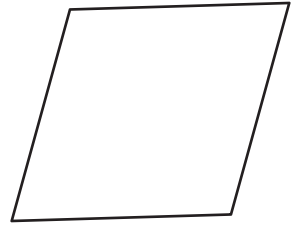
2)



Perimeter = 104 yd

side length = _____

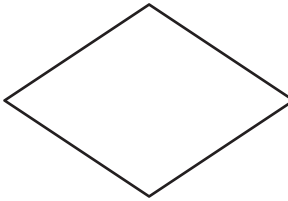
3)



Perimeter = 140 in

side length = _____

4)



Perimeter = 188 ft

side length = _____

7) What is the side length

8) The perimeter of a rhombus is 160 feet. Find the side length of the rhombus.

PREVIEW

Gain complete access to the largest collection of worksheets in all subjects!

Members, please log in to download this worksheet.

Not a member? Please sign up to gain complete access.

www.mathworksheets4kids.com