
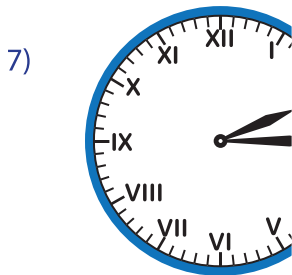

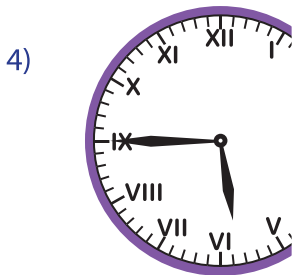
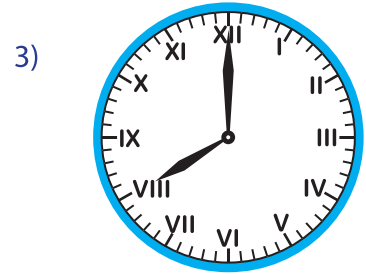




Roman Numerals: Clock

A) Read the Roman numerals dial and write the time.



PREVIEW

Gain complete access to the largest collection of worksheets in all subjects!

Members, please log in to download this worksheet.

Not a member? Please sign up to gain complete access.

www.mathworksheets4kids.com

B) Draw the hours and minutes hand for the given time.

1) 4 : 00

2) 11 : 30

3) 6 : 00

