

Name : _____

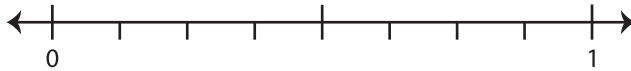
Rounding Proper Fraction: Number Line

Sheet 1

Round each fraction to the nearest whole number using number line.

1) $\frac{3}{8}$

i) Label $\frac{3}{8}$ on the number line.

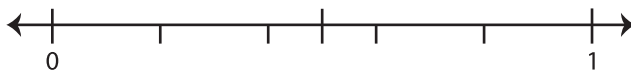


ii) Is it close to 0 or 1? _____

iii) $\frac{3}{8}$ rounded to the nearest whole number is _____

2) $\frac{1}{5}$

i) Label $\frac{1}{5}$ on the number line.

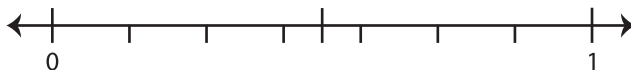


ii) Is it close to 0 or 1? _____

iii) $\frac{1}{5}$ rounded to the nearest whole number is _____

3) $\frac{4}{7}$

i) Label $\frac{4}{7}$ on the number line.



ii) Is it close to 0 or 1? _____

iii) $\frac{4}{7}$ rounded to the nearest whole number is _____