

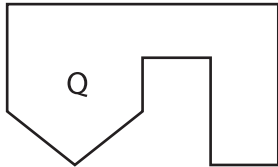
Name : _____

Scale Factors - Area

L1S1

Each pair of figures is similar. Find the missing area. (A denotes Area)

1) Scale factor of Q to R is 6.4 : 1.7



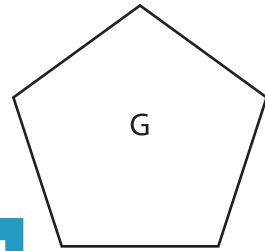
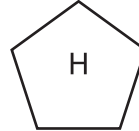
$$A = 81.92 \text{ yd}^2$$

Area of figure R = _____



$$A = ?$$

2) Scale factor of H to G is 2 : 3.5

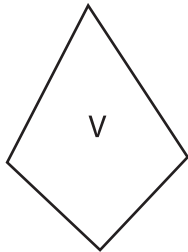


$$A = 49 \text{ ft}^2$$

= _____

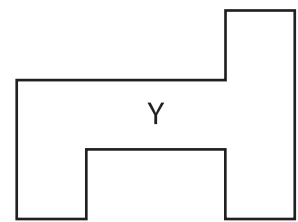
to X is 5 : 0.2

3) Scale factor of U to



$$A = ?$$

Area of figure V = _____



$$A = ?$$

= _____

5) The scale factor of
square feet. Find th

lter heptagon is 33.8

6) Find the area of figure B, if the area of figure C is 192 square inches and the scale factor of similar geometric figures B to C is 1 : 8.

PREVIEW
Gain complete access to the largest
collection of worksheets in all subjects!

Members, please
log in to
download this
worksheet.

Not a member?
Please sign up to
gain complete
access.

www.mathworksheets4kids.com