

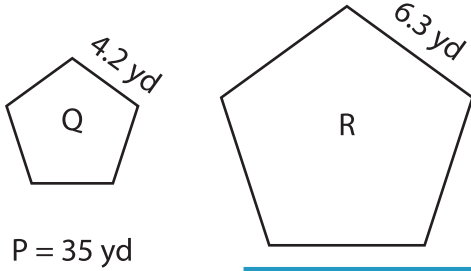
Name : _____

Scale Factors - Perimeters

L2S1

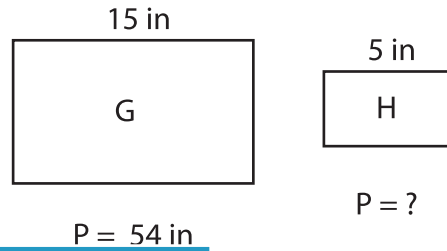
Each pair of figures is similar. Find the missing perimeter. (P denotes Perimeter)

1)



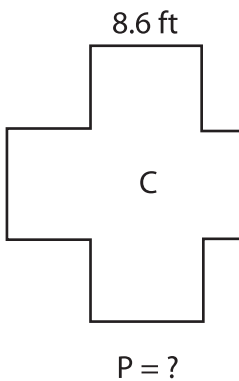
Perimeter of figure R = _____

2)



Perimeter of figure H = _____

3)



Perimeter of figure V = _____

PREVIEW


Gain complete access to the largest collection of worksheets in all subjects!

Members, please log in to download this worksheet.

Not a member? Please sign up to gain complete access.

www.mathworksheets4kids.com

5)



Perimeter of figure S = _____

Perimeter of figure X = _____