

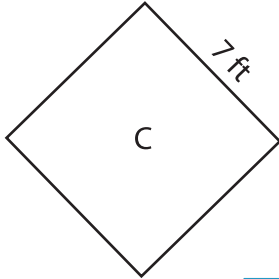
Name : _____

Scale Factors - Perimeters

L2S2

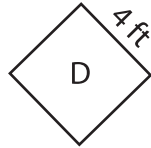
Each pair of figures is similar. Find the missing perimeter. (P denotes Perimeter)

1)



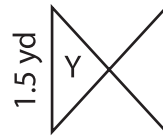
P = 28 ft

Perimeter of figure C = _____

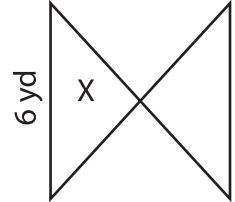


P = ?

2)



P = 11 yd



P = ?

Perimeter of figure X = _____

3)



P = ?

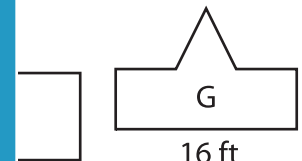
Perimeter of figure Q = _____

Gain complete access to the largest collection of worksheets in all subjects!

Members, please log in to download this worksheet.

Not a member? Please sign up to gain complete access.

www.mathworksheets4kids.com

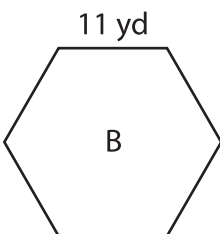


16 ft

P = 43.2 ft

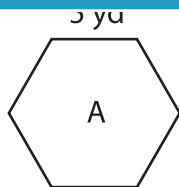
Perimeter of figure G = _____

5)



P = ?

Perimeter of figure B = _____

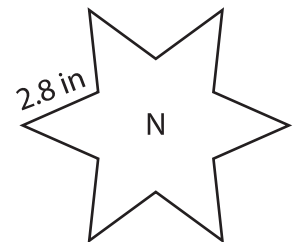


P = 30 yd



P = ?

Perimeter of figure M = _____



P = 52.4 in