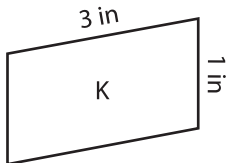
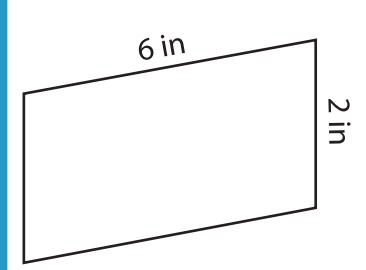
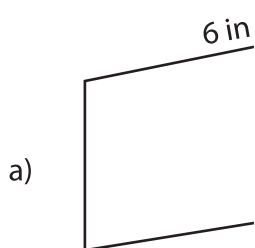


Scale Factors - MCQ

- 1) What happens to the new image if the scale factor of the original image to new image is $2.5 : 1$?
- a) Enlargement b) Reduction c) Remains same

- 2) Identify the scaled copy of the figure K.
- 



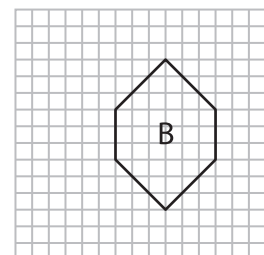
- 3) What would be the scale factor if the length of the new image is 20 yd and the scale factor is equal to one?

- a) 20 yd

- 4) Identify the scale factor of the new image.

- a) $1 : 1.6$

- 5) Which of the following figures is the scaled copy of figure B?



PREVIEW

Gain complete access to the largest collection of worksheets in all subjects!

Members, please log in to download this worksheet.

Not a member? Please sign up to gain complete access.

www.mathworksheets4kids.com

- 9 yd

