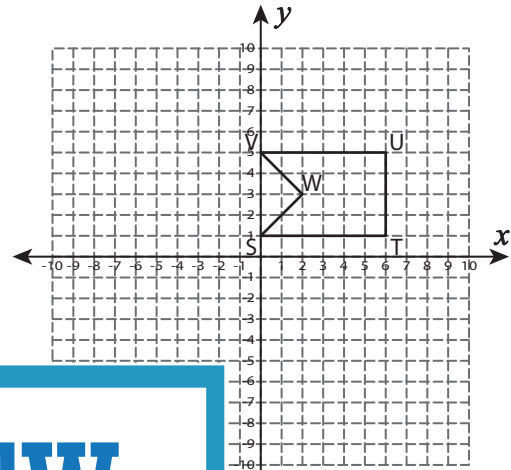
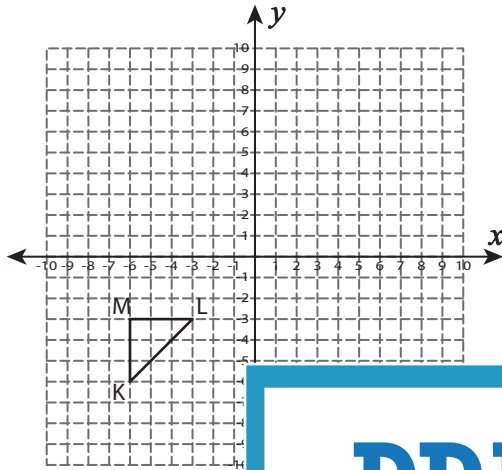


Dilate the Shapes

Draw the dilated image with the given center and scale factor (k).

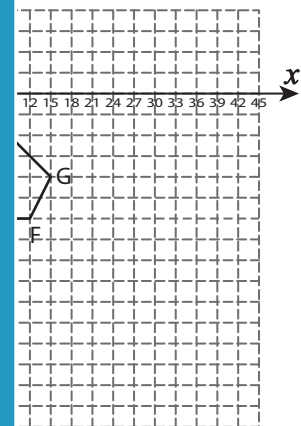
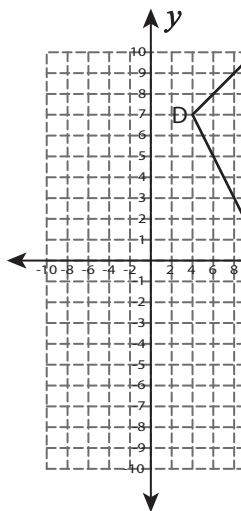
1) center : $(-3, 0)$, $k = \frac{4}{3}$

2) center : $(2, 1)$, $k = \frac{1}{2}$



3) center : $(10, 4)$, $k =$

$k = 4$



PREVIEW

Gain complete access to the largest collection of worksheets in all subjects!

Members, please log in to download this worksheet.

Not a member? Please sign up to gain complete access.

www.mathworksheets4kids.com

5) center : $(-4, 8)$, $k =$

$k = \frac{3}{7}$

