

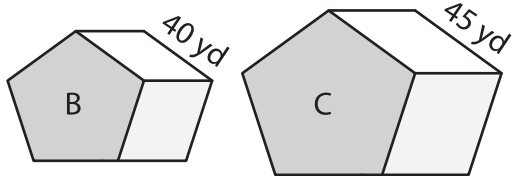
Name : _____

Scale Factors - Volumes

L2S1

Each pair of figures is similar. Find the missing volume. (V denotes Volume)

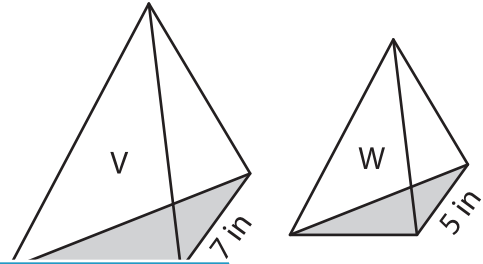
1)



$$V = 1,536 \text{ yd}^3$$

Volume of figure C = _____

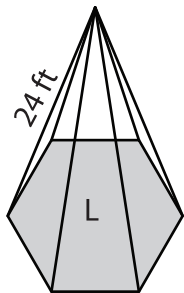
2)



$$V = ?$$

W = _____

3)



$$V = ?$$

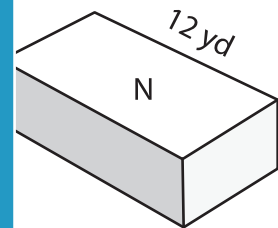
Volume of figure L = _____

Gain complete access to the largest collection of worksheets in all subjects!

Members, please log in to download this worksheet.

Not a member? Please sign up to gain complete access.

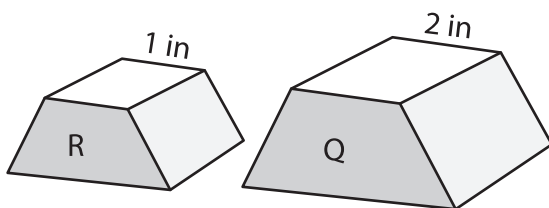
www.mathworksheets4kids.com



$$V = ?$$

N = _____

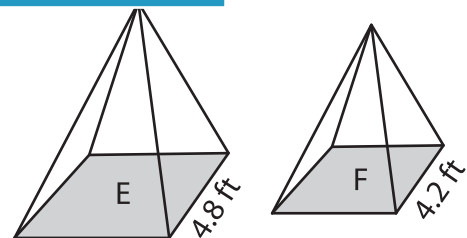
5)



$$V = ?$$

$$V = 72 \text{ in}^3$$

Volume of figure R = _____



$$V = 51.2 \text{ ft}^3$$

$$V = ?$$

Volume of figure F = _____