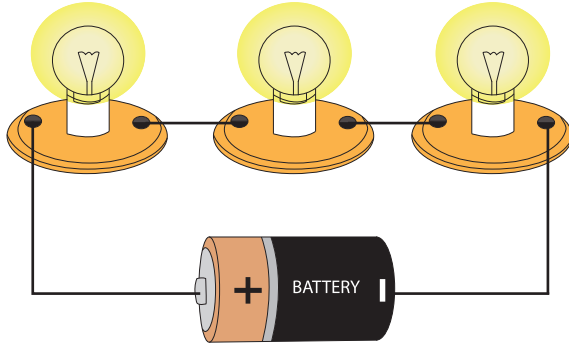


Name : \_\_\_\_\_


# Series and Parallel Circuits

Examine each electric circuit. State whether it is series or parallel.

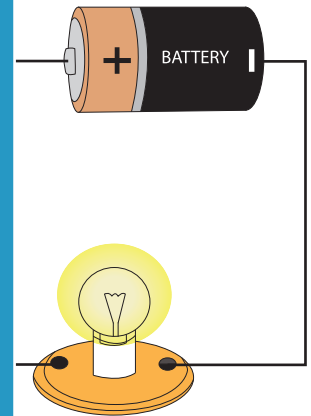

1)



2)



3)



**PREVIEW**

Gain complete access to the largest collection of worksheets in all subjects!

Members, please log in to download this worksheet.

Not a member? Please sign up to gain complete access.

[www.mathworksheets4kids.com](http://www.mathworksheets4kids.com)

5)

