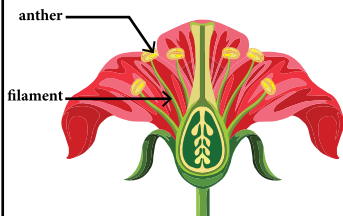


Name : _____

Parts of a Flower

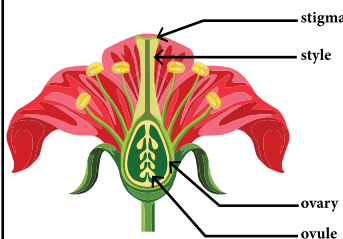
Look at the parts of a flower pictures and answer the questions.

stamen



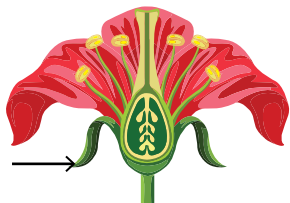
What is a stamen?

pistil



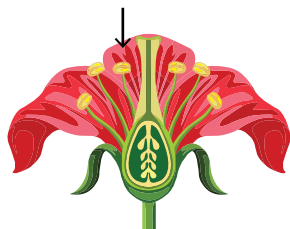
What is a pistil?

sepal



What is a sepal?

petal



What are the functions of petals?

PREVIEW

Gain complete access to the largest collection of worksheets in all subjects!

Members, please log in to download this worksheet.

Not a member? Please sign up to gain complete access.

www.mathworksheets4kids.com