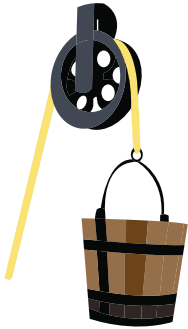


Name : _____

PUSH AND PULL

Identify the force used in each picture as a "push" or "pull". Trace your answer.

1)



pull

2)




push

3)




push

4)




pull

5)



push

6)



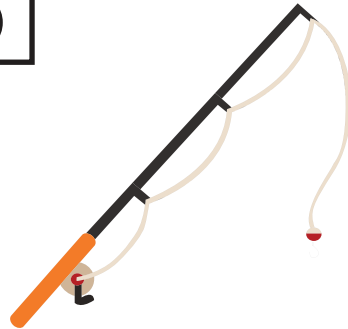
pull

7)



push

8)



pull

9)



pull