


Name : _____

Life Cycle of a Chicken


Recognize and describe each stage in the life cycle of a chicken.














PREVIEW

Gain complete access to the largest collection of worksheets in all subjects!

Members, please log in to download this worksheet.

Not a member? Please sign up to gain complete access.

www.mathworksheets4kids.com