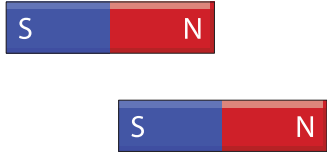


Name : _____

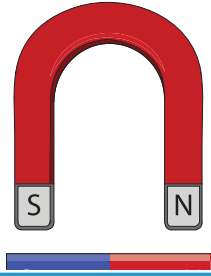
Attract or Repel?

Look at each pair of magnets. Write whether they attract or repel.


1)




2)



3)



4)



PREVIEW

Gain complete access to the largest collection of worksheets in all subjects!

Members, please log in to download this worksheet.

Not a member? Please sign up to gain complete access.

www.mathworksheets4kids.com



7)

