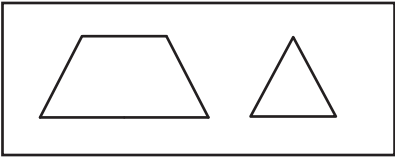


Name : _____

Composing & Decomposing 2D Shapes

A) Choose the figure formed by composing each pair of 2D shapes.

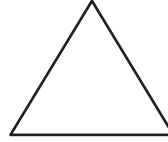
1)



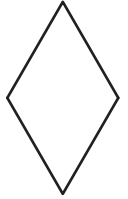
a)



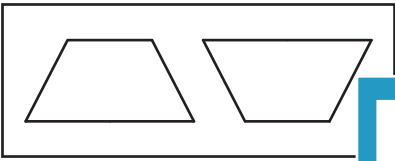
b)



c)



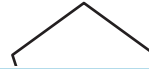
2)



a)



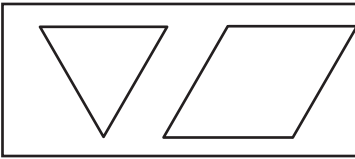
b)



c)



3)

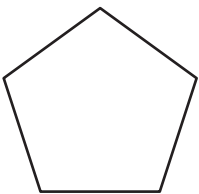


c)



B) Choose the pair of


1)



2)



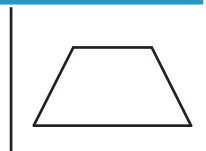
3)




a)



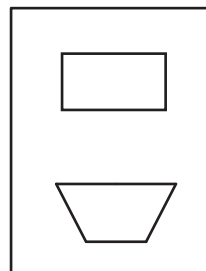
b)



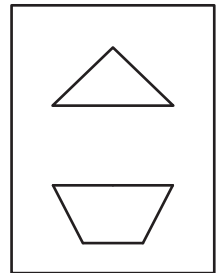
a)



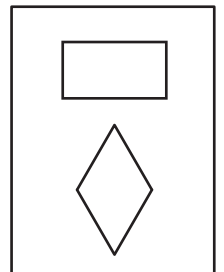
b)




c)



c)



c)



PREVIEW

Gain complete access to the largest collection of worksheets in all subjects!

Members, please log in to download this worksheet.

Not a member? Please sign up to gain complete access.

www.mathworksheets4kids.com

using each figure.