


Name : \_\_\_\_\_

## Identifying & Naming 2D Shapes

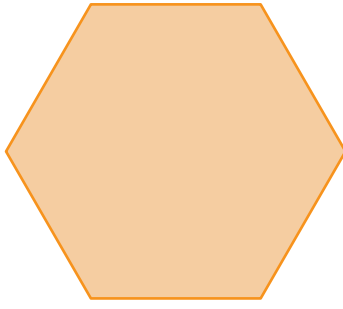
Identify each 2D shape and write its name.

1)



\_\_\_\_\_

2)



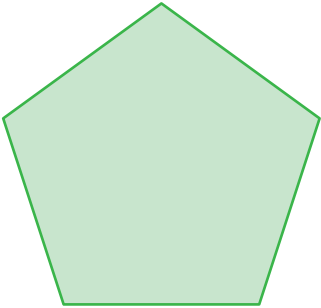
\_\_\_\_\_

3)




\_\_\_\_\_

4)



\_\_\_\_\_

5)




\_\_\_\_\_

6)




\_\_\_\_\_

7)



\_\_\_\_\_

8)



\_\_\_\_\_

9)



\_\_\_\_\_