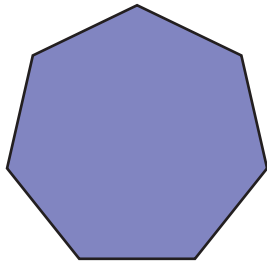


# Types of Polygons

Write the number of sides and name each polygon.

1)



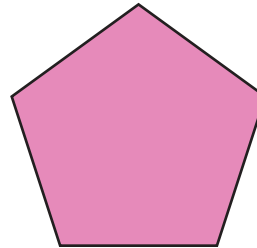
Number of sides

\_\_\_\_\_

Polygon type

\_\_\_\_\_

2)



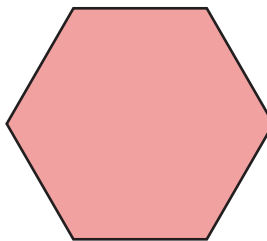
Number of sides

\_\_\_\_\_

Polygon type

\_\_\_\_\_

3)



Number of sides

\_\_\_\_\_

Polygon type

\_\_\_\_\_

4)

## PREVIEW

Gain complete access to the largest collection of worksheets in all subjects!

Members, please log in to download this worksheet.

Not a member? Please sign up to gain complete access.

[www.mathworksheets4kids.com](http://www.mathworksheets4kids.com)

Number of sides

\_\_\_\_\_

Polygon type

\_\_\_\_\_

5)



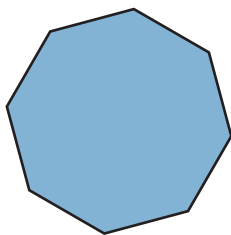
Number of sides

\_\_\_\_\_

Polygon type

\_\_\_\_\_

7)



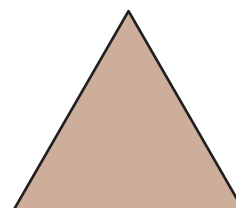
Number of sides

\_\_\_\_\_

Polygon type

\_\_\_\_\_

10)



Number of sides

\_\_\_\_\_

Polygon type

\_\_\_\_\_

9)

