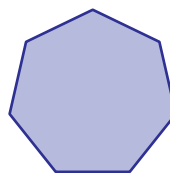



Name : _____

Comparing Sides and Vertices

1)




Number of vertices: _____

Number of vertices: _____

Which shape has more vertices?

2)



Number of

S: _____

Which shape has few

3)



Number of ve

S: _____

Which shape has few

4)





Number of

S: _____

Which shape has more sides:

5)



Number of vertices: _____

Number of vertices: _____

Which shape has fewer vertices?

PREVIEW

Gain complete access to the largest collection of worksheets in all subjects!

Members, please log in to download this worksheet.

Not a member? Please sign up to gain complete access.

www.mathworksheets4kids.com