

Name: _____

Sides and Vertices

Identify each 2D shape, and write the number of sides and vertices.

1)

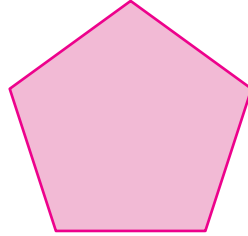


Sides

Vertices

Name: _____

2)



Sides

Vertices

Name: _____

3)

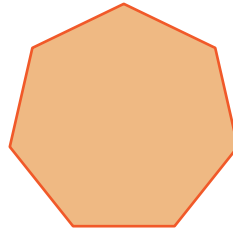


Sides

Vertices

Name: _____

4)

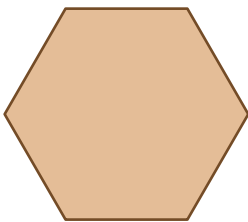


Sides

Vertices

Name: _____

5)

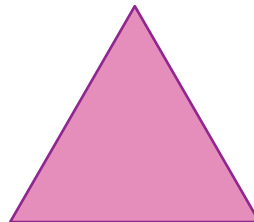


Sides

Vertices

Name: _____

6)



Sides

Vertices

Name: _____

7)




Sides

Vertices

Name: _____

8)



Sides

Vertices

Name: _____