


Name : \_\_\_\_\_

## Sides and Corners

Write the number of sides and corners in each 2D shape.

1)




square

Sides: \_\_\_\_\_

Corners: \_\_\_\_\_

2)

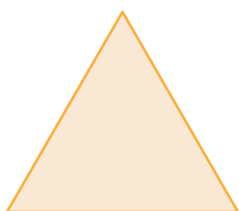


circle

Sides: \_\_\_\_\_

Corners: \_\_\_\_\_

3)




triangle

Sides: \_\_\_\_\_

Corners: \_\_\_\_\_

4)




rectangle

Sides: \_\_\_\_\_

Corners: \_\_\_\_\_

5)

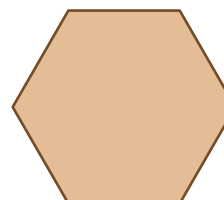


pentagon

Sides: \_\_\_\_\_

Corners: \_\_\_\_\_

6)



hexagon

Sides: \_\_\_\_\_

Corners: \_\_\_\_\_