


Name : _____

Sides and Corners

Identify the shape of each real-life object, and write the number of sides, and corners.

1)



Shape: _____

Sides: _____


Corners: _____

2)



Shape: _____

3)



Shape: _____

Sides: _____

Corners: _____

PREVIEW

Gain complete access to the largest collection of worksheets in all subjects!

Members, please log in to download this worksheet.

Not a member? Please sign up to gain complete access.

www.mathworksheets4kids.com

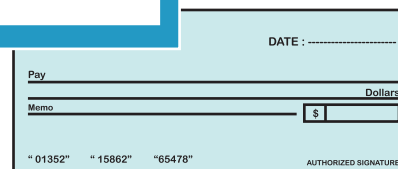
5)



Shape: _____

Sides: _____

Corners: _____



Shape: _____

Sides: _____

Corners: _____