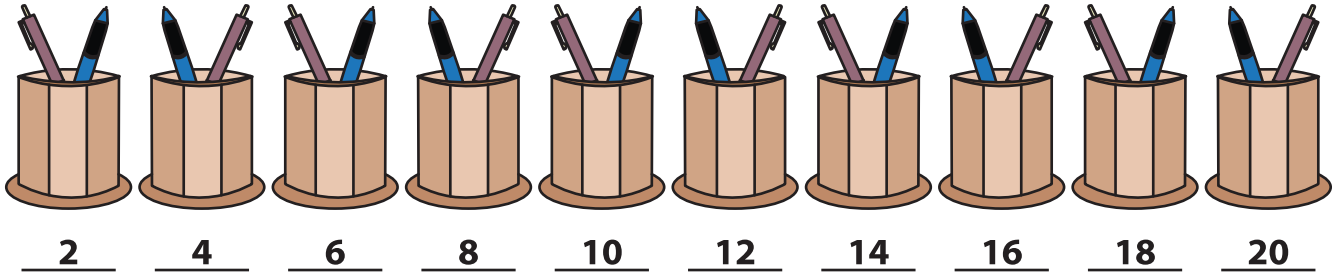


Name : _____


Skip Counting by 2s

Sheet 5


1) Count by 2s, and write how many pens are there in total.



2) Count by 2s, and write how many strawberries are there altogether.



3) Count by 2s, and



4) Count by 2s, and



5) Count by 2s, and write how many bells are there altogether.



PREVIEW

Gain complete access to the largest collection of worksheets in all subjects!

Members, please log in to download this worksheet.

Not a member? Please sign up to gain complete access.

www.mathworksheets4kids.com

