

Name : _____

Skip Counting by 3s - Maze

Type 3

Count by 3s. Color the path, and find out where the Smiths went over the weekend.



			3	6	10	74	21	42
			20	9	12	15	18	21
			5	43	55	82	69	24
8	35					26	27	
70	58					47	30	
87	61					73	33	
13						39	36	
28						97	18	
86	12							
72	41	63	60	57	65			
52	17	37	91	66	44	11	57	9

PREVIEW

Gain complete access to the largest collection of worksheets in all subjects!

Members, please log in to download this worksheet.



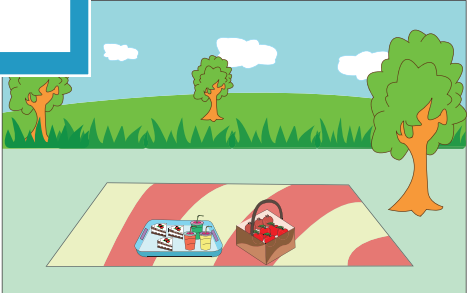
Not a member? Please sign up to gain complete access.

www.mathworksheets4kids.com

The Smiths went to the _____.

Skip Counting by 3s - Maze

Count by 3s. Color the path, and find out where the Smiths went over the weekend.

			3	6	10	74	21	42
	20		9	12	15	18	21	
	5		43	55	82	69	24	
8	35					26	27	
70	58					47	30	
87	61					73	33	
13						39	36	
28						97	18	
86	12							
72	41	63	60	57	65			
52	17	37	91	66	44	11	57	9

PREVIEW

Gain complete access to the largest collection of worksheets in all subjects!

Members, please log in to download this worksheet.

Not a member? Please sign up to gain complete access.

www.mathworksheets4kids.com

The Smiths went to the **amusement park** .