



Name : _____

Skip Count - 10s to 100s



1) Count by 10s. How many pencils are there in all?



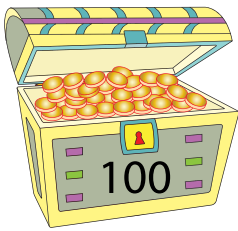
10




20



2) Count by 100s. How many coins are there in all?






PREVIEW


Gain complete access to the largest collection of worksheets in all subjects!

Members, please log in to download this worksheet.

Not a member? Please sign up to gain complete access.

www.mathworksheets4kids.com





3) Count by 50s. How many eggs are there in all?





