

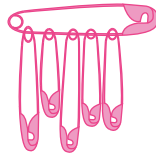
Name : _____

Skip Count - 6s to 12s

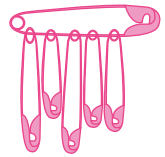
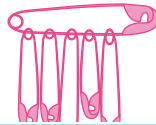
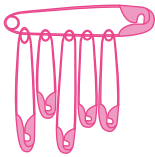
1) Count by 6s. How many safety pins are there altogether?



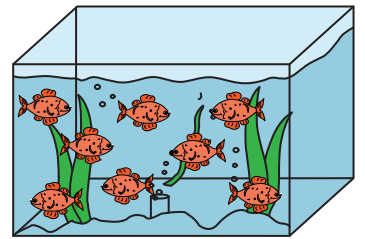
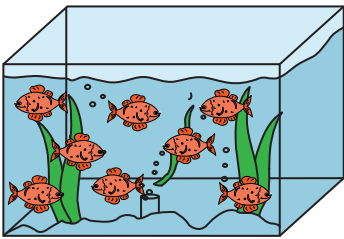
6



12



2) Count by 8s. How many fish are there altogether?



PREVIEW

Gain complete access to the largest collection of worksheets in all subjects!

Members, please log in to download this worksheet.

Not a member? Please sign up to gain complete access.

www.mathworksheets4kids.com

3) Count by 11s. How many tomatoes are there altogether?

