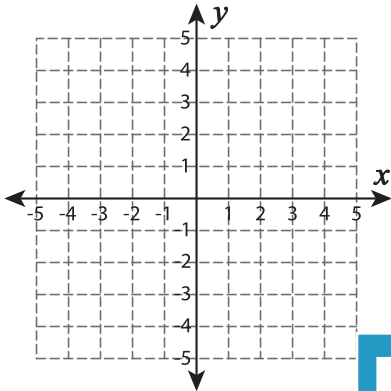


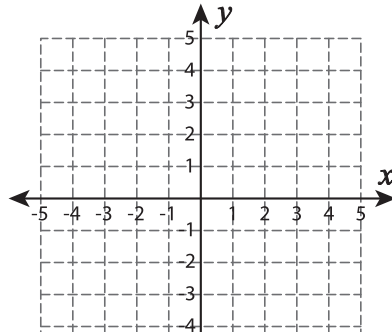
## Types of Slopes

A) Draw a line through the given coordinates and identify the types of slopes.

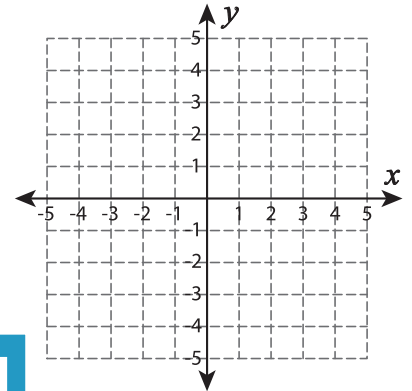
1)  $(5, 1)$  and  $(2, 4)$



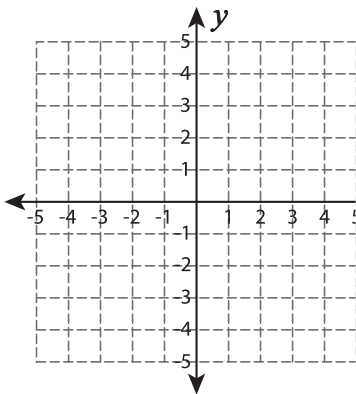
2)  $(-2, 3)$  and  $(-2, -5)$



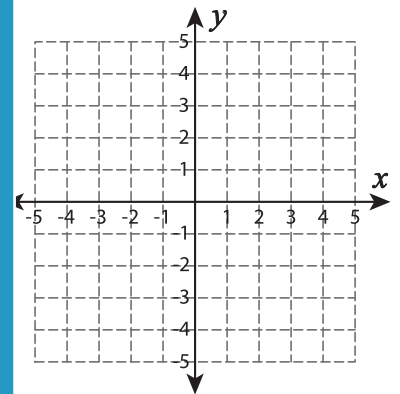
3)  $(-1, 2)$  and  $(-4, 0)$



4)  $(-4, -2)$  and  $(1, 2)$



5)  $(-3, -4)$  and  $(5, -4)$



# PREVIEW

Gain complete access to the largest  
collection of worksheets in all subjects!

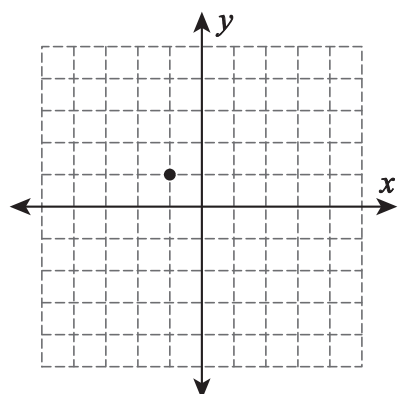
Members, please  
log in to  
download this  
worksheet.

Not a member?  
Please sign up to  
gain complete  
access.

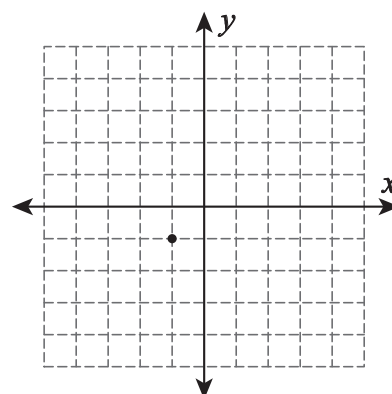
[www.mathworksheets4kids.com](http://www.mathworksheets4kids.com)

B) Draw a line through

1) Positive slope



2) Zero slope



3) Negative slope

