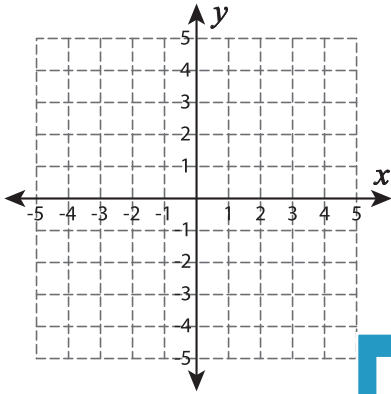


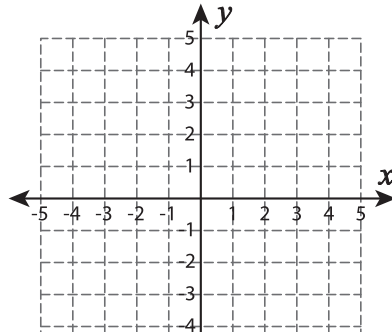
Types of Slopes

A) Draw a line through the given coordinates and identify the types of slopes.

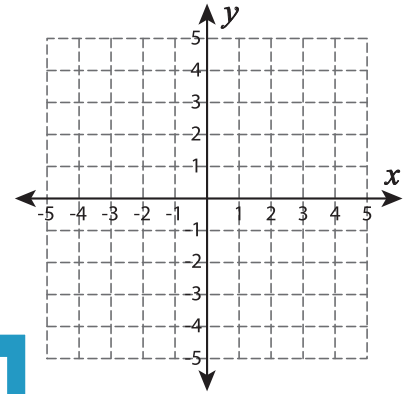
1) $(-4, 4)$ and $(-4, -1)$



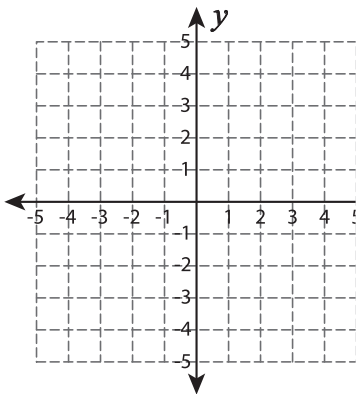
2) $(-2, -2)$ and $(0, 5)$



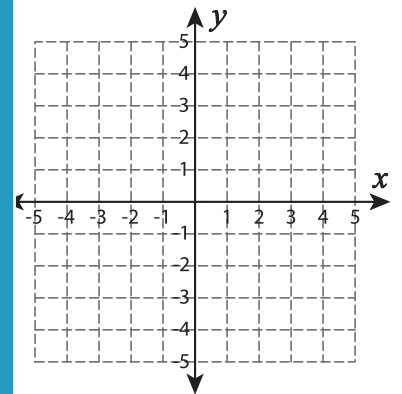
3) $(-3, 2)$ and $(1, 2)$



4) $(-2, -1)$ and $(3, -1)$



5) $(3, -4)$ and $(0, -2)$



PREVIEW

Gain complete access to the largest collection of worksheets in all subjects!

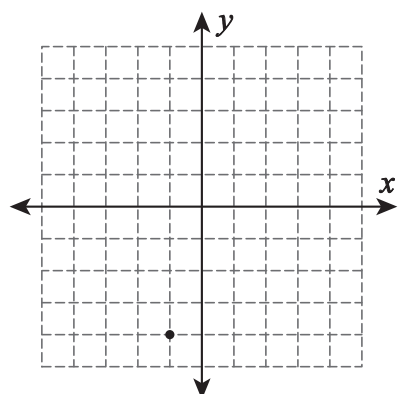
Members, please log in to download this worksheet.

Not a member? Please sign up to gain complete access.

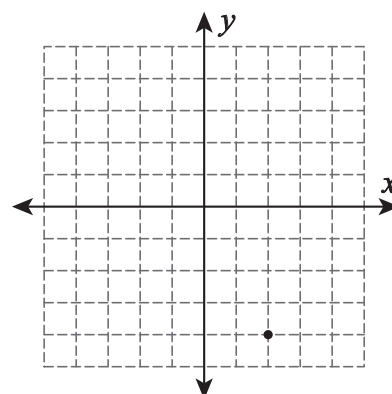
www.mathworksheets4kids.com

B) Draw a line through

1) Zero slope



2) Negative slope



3) Undefined slope

