


Name : _____

Slope of the Roof

Sheet 1

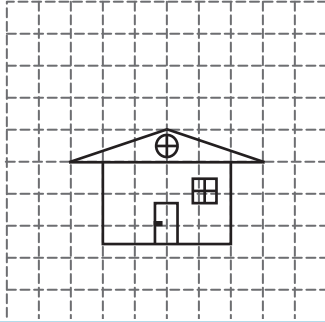
Find the slope of each roof. (The slope should be positive)

1)

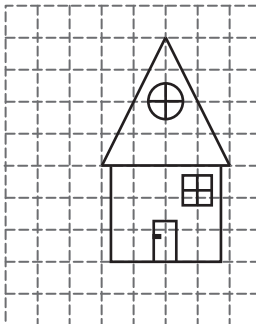


Slope = _____

2)




4)



Slope = _____

3)



Slope = _____


Gain complete access to the largest collection of worksheets in all subjects!

Members, please log in to download this worksheet.

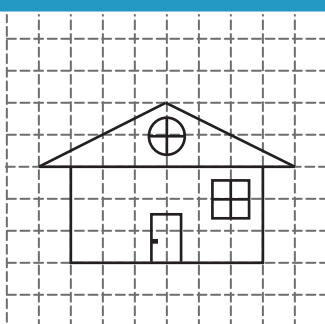
Not a member? Please sign up to gain complete access.

www.mathworksheets4kids.com


7)



Slope = _____



Slope = _____



Slope = _____