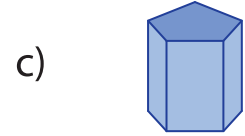
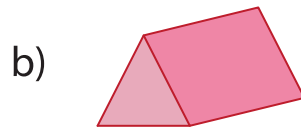
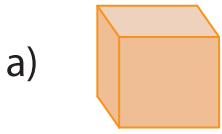


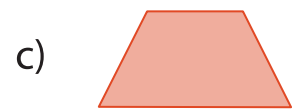
Name : \_\_\_\_\_

## 2D Faces on 3D Shapes

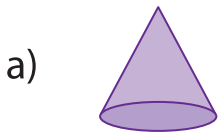
1) Which 3D shape has a triangle as a face?



2) Which 2D shape is the face of a cube?



3) Which 3D shape



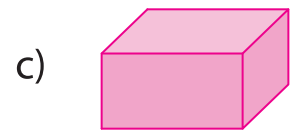
# PREVIEW

Gain complete access to the largest collection of worksheets in all subjects!


Members, please log in to download this worksheet.

Not a member? Please sign up to gain complete access.

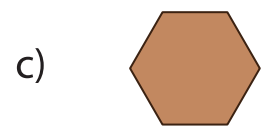
[www.mathworksheets4kids.com](http://www.mathworksheets4kids.com)



4) Which 2D shape



5) Which 2D shape



6) Which 3D shape has a hexagon as a face?

