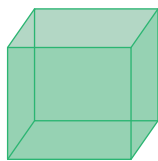


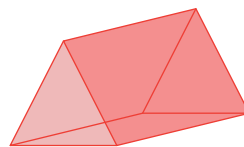
Name : \_\_\_\_\_

## Comparing Faces, Edges, and Vertices

1)



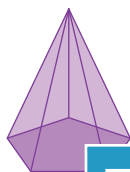
Number of vertices: \_\_\_\_\_



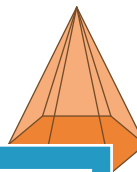
Number of vertices: \_\_\_\_\_

Which shape has fewer vertices?

2)



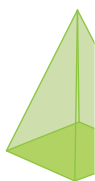
Number of edges: \_\_\_\_\_



Number of edges: \_\_\_\_\_

Which shape has more edges?

3)



Number of faces: \_\_\_\_\_



Number of faces: \_\_\_\_\_

Which shape has more faces?

4)



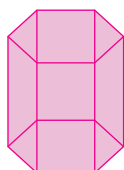
Number of vertices: \_\_\_\_\_



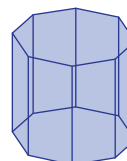
Number of vertices: \_\_\_\_\_

Which shape has more vertices?

5)



Number of faces: \_\_\_\_\_



Number of faces: \_\_\_\_\_

Which shape has fewer faces?

**PREVIEW**

Gain complete access to the largest collection of worksheets in all subjects!

Members, please log in to download this worksheet.

Not a member? Please sign up to gain complete access.

[www.mathworksheets4kids.com](http://www.mathworksheets4kids.com)