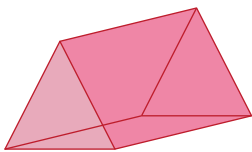


Name : _____

Faces, Edges, and Vertices - MCQ

1) How many edges does this shape have?



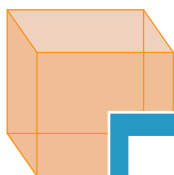
a) 6

b) 5

c) 8

d) 9

2) How many faces does this shape have?

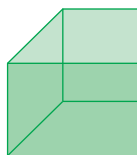


a) 6

b) 12

d) 10

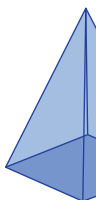
3) How many vertices does this shape have?



b) 8

d) 6

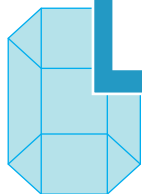
4) How many faces does this shape have?



b) 10

d) 4

5) How many edges does this shape have?

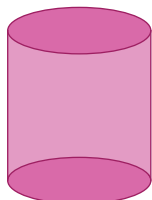


c) 18

b) 12

d) 24

6) How many vertices does this shape have?



a) 3

b) 6

c) 2

d) 0

PREVIEW

Gain complete access to the largest collection of worksheets in all subjects!

Members, please log in to download this worksheet.

Not a member? Please sign up to gain complete access.

www.mathworksheets4kids.com