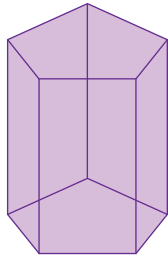


Name : _____

Faces, Edges, and Vertices

Write the number of faces, edges, and vertices, and identify each 3D shape.

1)



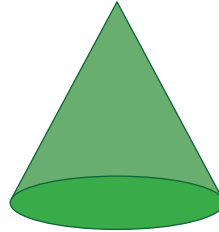
Faces

Edges

Vertices

Name: _____

2)



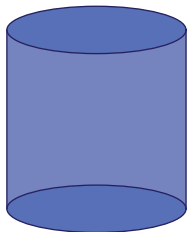
Faces

Edges

Vertices

Name: _____

3)



Faces

Edges

Vertices

Name: _____

PREVIEW

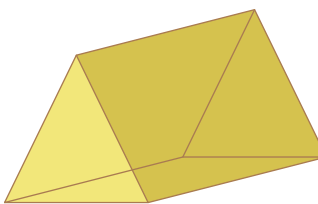
Gain complete access to the largest collection of worksheets in all subjects!

Members, please log in to download this worksheet.

Not a member? Please sign up to gain complete access.

www.mathworksheets4kids.com

5)



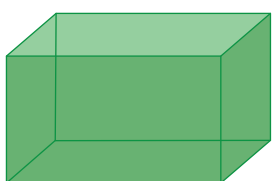
Faces

Edges

Vertices

Name: _____

7)



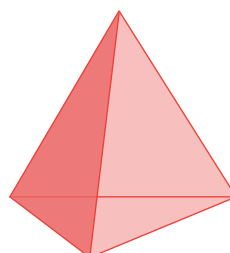
Faces

Edges

Vertices

Name: _____

8)



Faces

Edges

Vertices

Name: _____