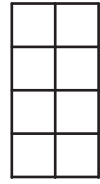


Name : _____

Matching 3D Shapes & Views

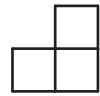
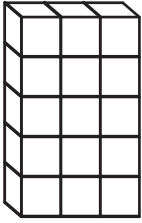
Match each 3D shape to its corresponding view.

1)



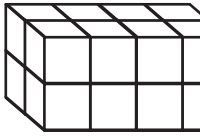
Front View

2)

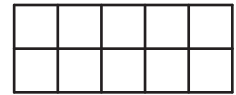


Right Side View

3)

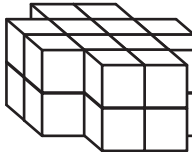


PREVIEW
Gain complete access to the largest collection of worksheets in all subjects!



Front View

4)



Members, please log in to download this worksheet.

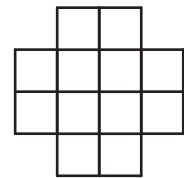
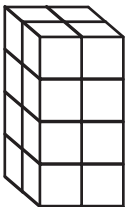
Not a member? Please sign up to gain complete access.

www.mathworksheets4kids.com



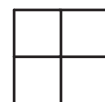
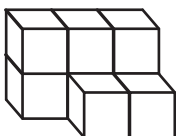
Left Side View

5)



Top View

6)



Left Side View