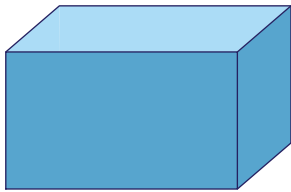


Name : \_\_\_\_\_

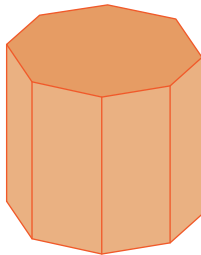
## Naming the Prisms & Pyramids

A) Identify and name each prism.

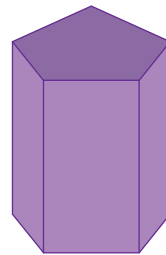
1)



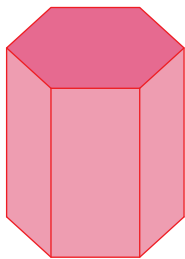
2)



3)



4)



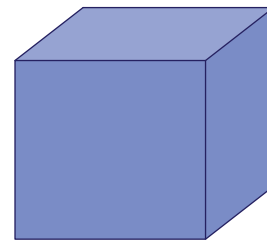
**PREVIEW**

Gain complete access to the largest collection of worksheets in all subjects!

Members, please log in to download this worksheet.

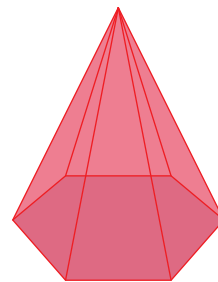
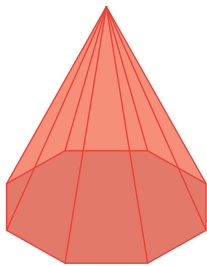
Not a member? Please sign up to gain complete access.

[www.mathworksheets4kids.com](http://www.mathworksheets4kids.com)

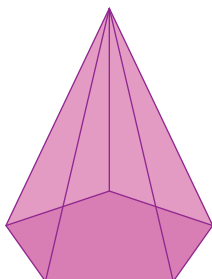


B) Identify and name

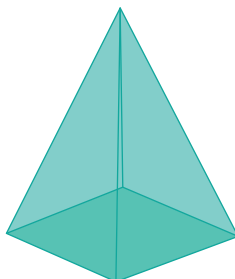
1)



4)



5)



6)

