

Name : _____

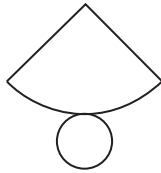
Nets of 3D Shapes

Choose the correct net representation of each solid shape.

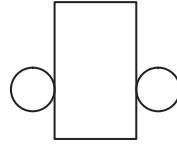
1)



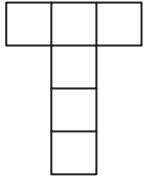
a)



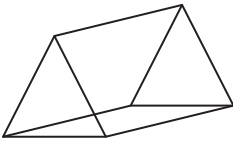
b)



c)



2)



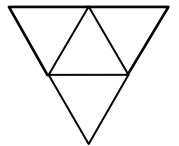
a)



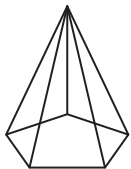
b)



c)



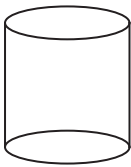
3)



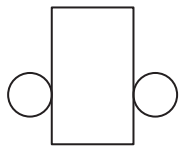
c)



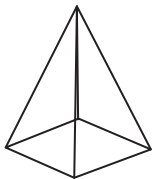
4)



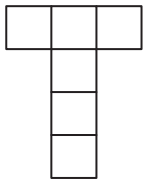
c)



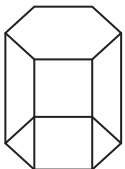
5)



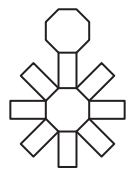
c)



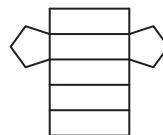
6)



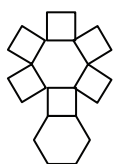
a)



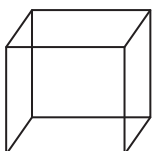
b)



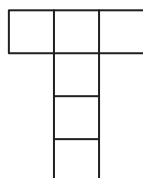
c)



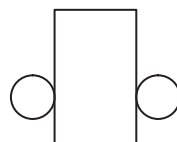
7)



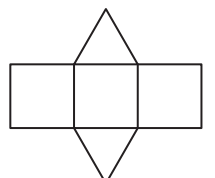
a)



b)



c)



PREVIEW

Gain complete access to the largest collection of worksheets in all subjects!

Members, please log in to download this worksheet.

Not a member? Please sign up to gain complete access.

www.mathworksheets4kids.com