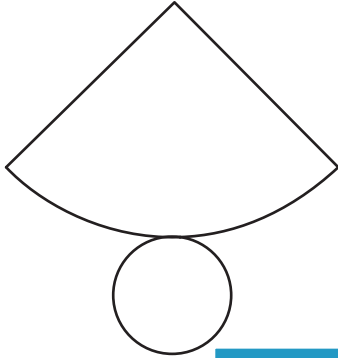


Name : \_\_\_\_\_

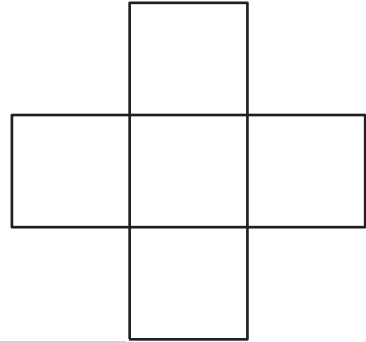
## Is It a Net?

Determine if these are nets of 3D shapes and name the shapes if they are.

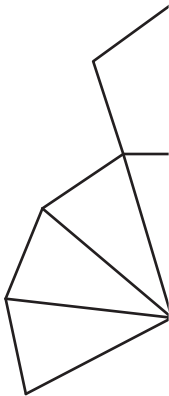
1)



2)



3)



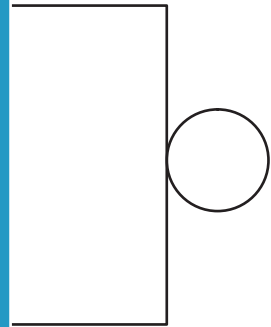
**PREVIEW**

Gain complete access to the largest collection of worksheets in all subjects!

Members, please log in to download this worksheet.

Not a member? Please sign up to gain complete access.

[www.mathworksheets4kids.com](http://www.mathworksheets4kids.com)



5)

