


Name : \_\_\_\_\_

## Roll, Slide, & Stack

Test if each real-life 3D shape can roll, slide, or/and stack.

1)




Stack

Slide

Roll

2)




Slide

Roll

Stack

3)




Slide

4)



Slide

5)




Roll

Slide

Stack

6)



Slide

Stack

Roll

# PREVIEW

Gain complete access to the largest collection of worksheets in all subjects!

Members, please log in to download this worksheet.

Not a member? Please sign up to gain complete access.

[www.mathworksheets4kids.com](http://www.mathworksheets4kids.com)