

Name : _____

T1L1S5

Area of a Square

Find the area of each square.

1)



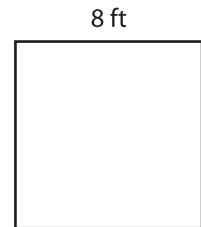
Area =

2)




Area =

3)



4)



Area =

Gain complete access to the largest collection of worksheets in all subjects!

Members, please log in to download this worksheet.

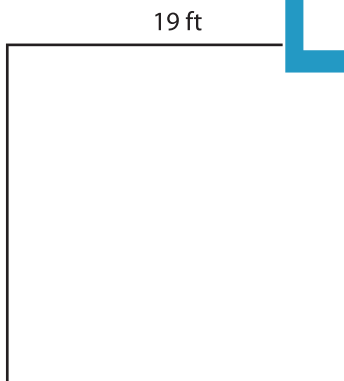
Not a member? Please sign up to gain complete access.

www.mathworksheets4kids.com



Area =

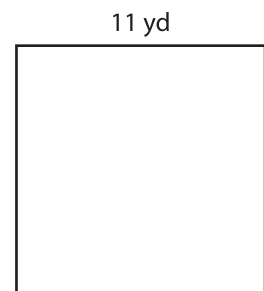
7)



Area =



Area =



Area =