

Name : _____


Perimeter of a Square

T1S1

Find the perimeter of each square.

1)

11.3 yd



Perimeter =

2)



Perimeter =


3)



Perimeter =

4)


7.2 yd



Perimeter =

5)


18.1 ft



Perimeter =

6)


3.8 yd



Perimeter =

7)

17.6 in



Perimeter =

8)

2.5 in



Perimeter =

9)

12.4 ft



Perimeter =