

Name : _____

Perimeter of a Square

T1S2

Find the perimeter of each square.

1)




Perimeter =

2)

$1\frac{5}{16}$ yd



3)



Perimeter =

4)



Perimeter =


PREVIEW
Gain complete access to the largest collection of worksheets in all subjects!

Members, please log in to download this worksheet.

Not a member? Please sign up to gain complete access.

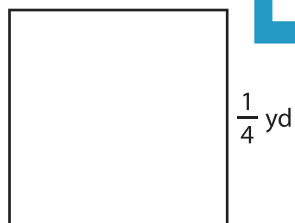
www.mathworksheets4kids.com

$\frac{1}{10}$ yd



Perimeter =

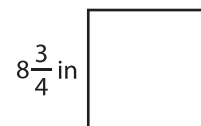
7)



Perimeter =



Perimeter =



Perimeter =