

Name : _____

Perimeter of a Square

T1S5

Find the perimeter of each square.


1)



$6\frac{1}{15}$ ft

Perimeter =

2)



$\frac{12}{19}$ yd

Perimeter =

3)



$\frac{7}{2}$ in

4)



$\frac{1}{8}$ in

Perimeter =


PREVIEW
Gain complete access to the largest collection of worksheets in all subjects!

Members, please log in to download this worksheet.

Not a member? Please sign up to gain complete access.

www.mathworksheets4kids.com

$10\frac{9}{20}$ yd




Perimeter =

7)

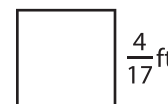


$\frac{8}{3}$ yd

Perimeter =



Perimeter =



$\frac{4}{17}$ ft

Perimeter =