

Name : _____

T2S4

Perimeter of a Square

A) Find the perimeter of each square for the given side length.

1) side length = $4\frac{3}{8}$ in

Perimeter = _____

2) side length = $\frac{10}{11}$ ft

Perimeter = _____


3) side length = $\frac{18}{5}$ yd

4) side length = $3\frac{7}{12}$ in

Perimeter = _____


B) Find the perimeter

5) $\frac{5}{4}$ ft

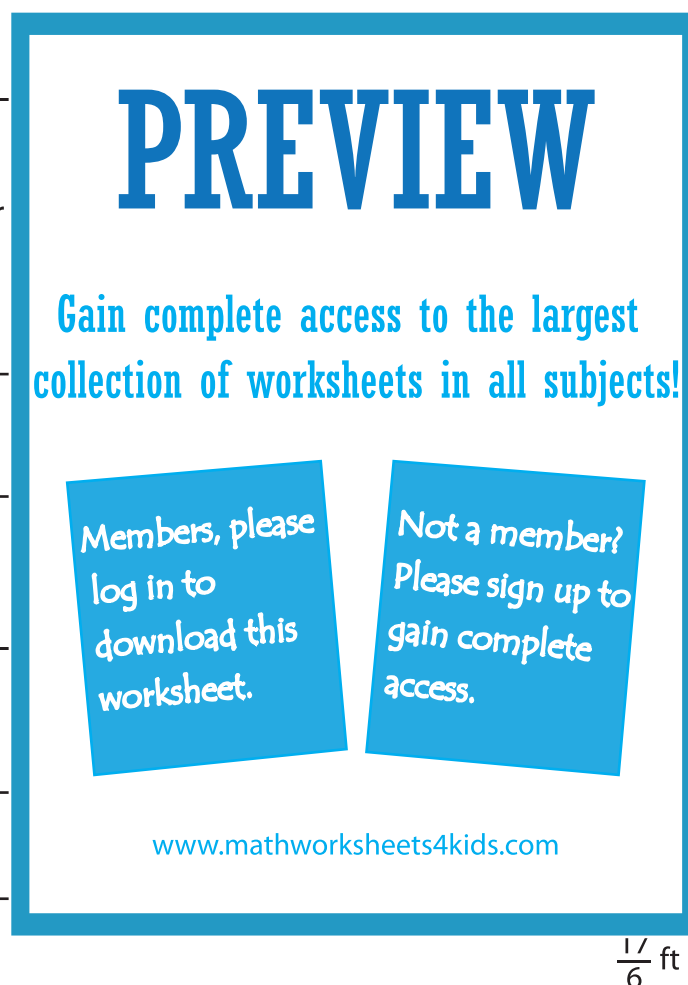


Perimeter = _____

7) $\frac{14}{15}$ in



Perimeter = _____



$8\frac{2}{9}$ yd

$\frac{1}{6}$ ft

Perimeter = _____

9) If the side of a square measures $\frac{1}{13}$ inch, find the perimeter.
