


Name : \_\_\_\_\_

## Perimeter of a Square

T1L1S3

Find the perimeter of each square.

1)



12 yd

Perimeter =

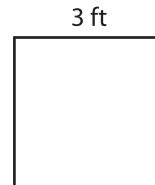
2)



9 in

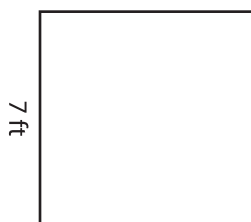
Perimeter =

3)



3 ft

4)



7 ft

Perimeter =

**PREVIEW**  
Gain complete access to the largest collection of worksheets in all subjects!

Members, please log in to download this worksheet.

Not a member? Please sign up to gain complete access.

[www.mathworksheets4kids.com](http://www.mathworksheets4kids.com)



2 in


Perimeter =

7)




10 in

Perimeter =



4 ft

Perimeter =



5 yd

Perimeter =