


Name : _____

Perimeter of a Square

T1L1S4

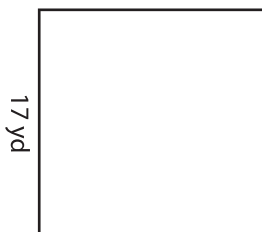
Find the perimeter of each square.

1)




Perimeter =

2)

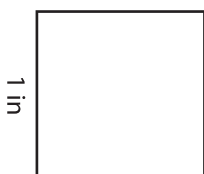


Perimeter =

3)



4)



Perimeter =


Gain complete access to the largest collection of worksheets in all subjects!

Members, please log in to download this worksheet.

Not a member? Please sign up to gain complete access.


www.mathworksheets4kids.com

6 yd



Perimeter =


7)



Perimeter =



Perimeter =



Perimeter =