


# Subtraction

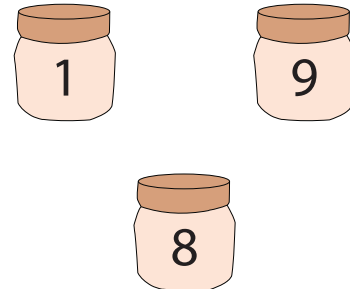
Sheet 3

Circle two numbers that need to be subtracted in each set to arrive at the answer (indicated as the third number).

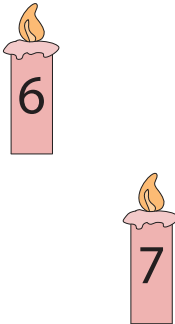
1)



2)



3)



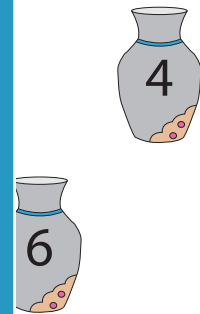
**PREVIEW**

Gain complete access to the largest collection of worksheets in all subjects!


Members, please log in to download this worksheet.

Not a member? Please sign up to gain complete access.

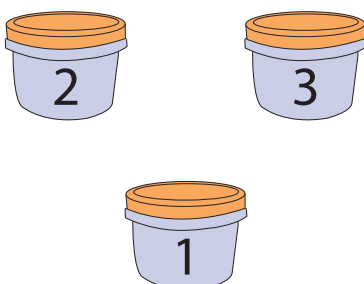
[www.mathworksheets4kids.com](http://www.mathworksheets4kids.com)



5)



7)



8)

