


# Subtraction Sentence

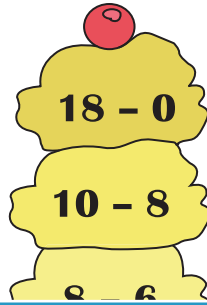
Sheet 2

Identify the correct subtraction sentences that equal the number displayed on each cone.

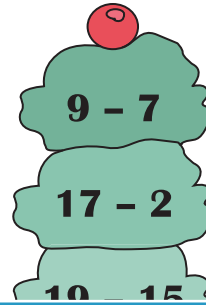
1)



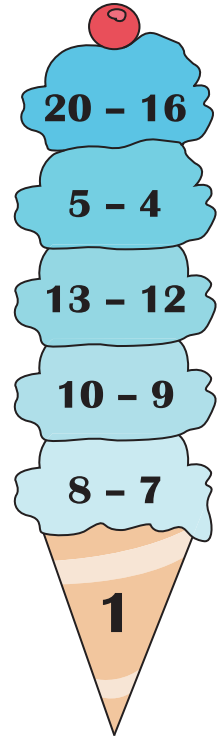
2)



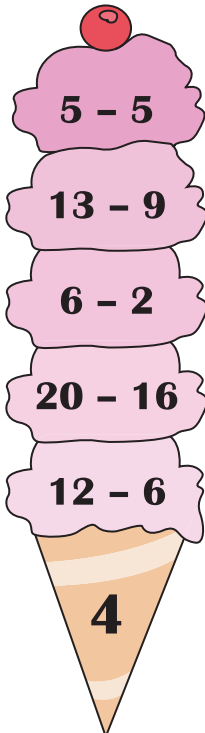
3)



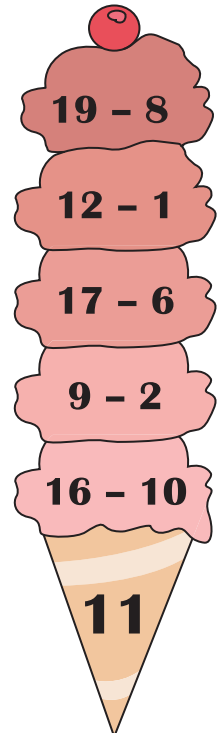
4)



5)



8)



## PREVIEW

Gain complete access to the largest collection of worksheets in all subjects!

Members, please log in to download this worksheet.

Not a member? Please sign up to gain complete access.

[www.mathworksheets4kids.com](http://www.mathworksheets4kids.com)