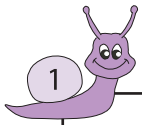


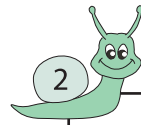
# Subtraction

Sheet 3



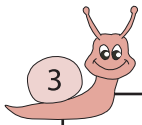
Circle the 2 numbers whose difference is 264

491      233      487      227



Circle the 2 numbers whose difference is 625

321      718      93      307



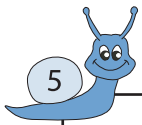
Circle the 2 numbers wh

216      945



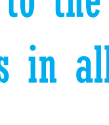
bers whose difference is 154

34      67      221




Circle the 2 numbers wh

85      624



bers whose difference is 390

55      645      285



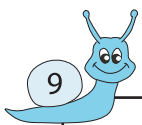
Circle the 2 numbers wh

386      369      233      222



bers whose difference is 915

75      64      76      991



Circle the 2 numbers whose difference is 813

962      154      967      959



Circle the 2 numbers whose difference is 441

639      209      198      610

# PREVIEW

Gain complete access to the largest  
collection of worksheets in all subjects!

Members, please  
log in to  
download this  
worksheet.

Not a member?  
Please sign up to  
gain complete  
access.

[www.mathworksheets4kids.com](http://www.mathworksheets4kids.com)