

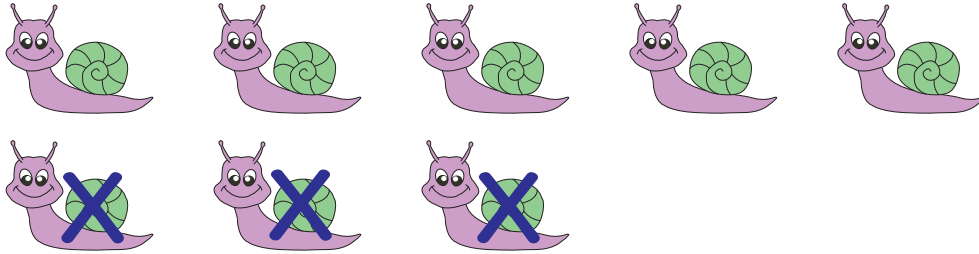
Name : _____

Score : _____

Cross out & Count


Subtraction within 10: S2

1)



$$\begin{array}{r} 8 \\ - 3 \\ \hline \end{array}$$

2)



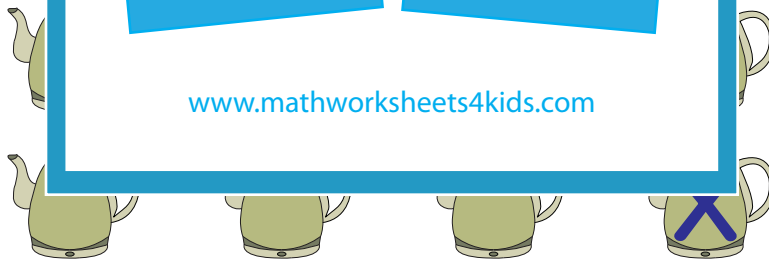

$$\begin{array}{r} 9 \\ - 7 \\ \hline \end{array}$$

3)



$$\begin{array}{r} 4 \\ - 4 \\ \hline \end{array}$$

4)



$$\begin{array}{r} 10 \\ - 1 \\ \hline \end{array}$$

5)



$$\begin{array}{r} 5 \\ - 2 \\ \hline \end{array}$$